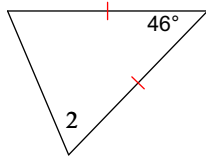


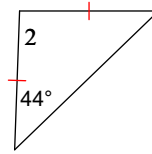
1.3 - Practice

Find the value of  $x$ .

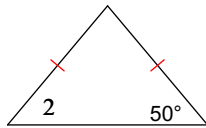
1)  $m\angle 2 = 5x + 7$



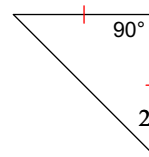
2)  $m\angle 2 = 15x + 2$



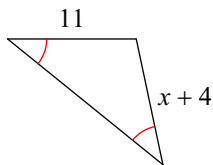
3)  $m\angle 2 = 3x + 17$



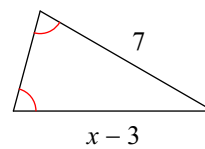
4)  $m\angle 2 = 4x + 5$



5)

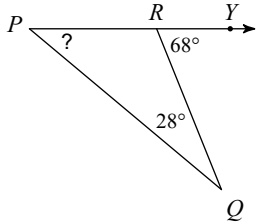


6)

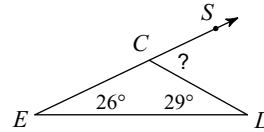


Find the measure of each angle indicated.

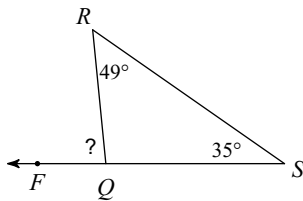
7)



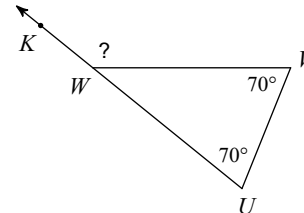
8)



9)

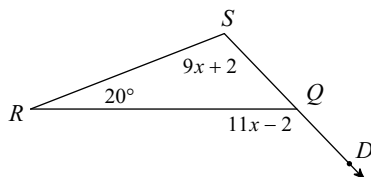


10)



Solve for  $x$ .

11)



12)

