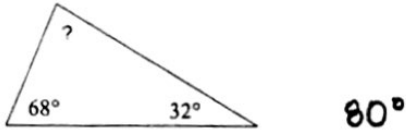


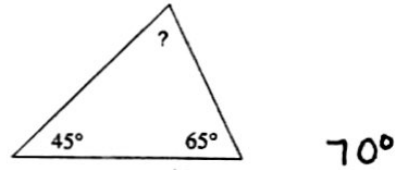
Assignment

Find the measure of each angle indicated.

1)

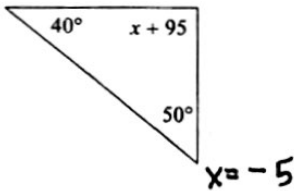


2)

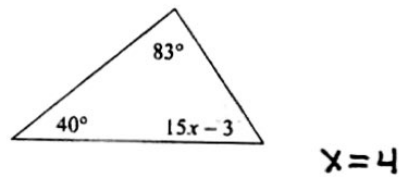


Solve for x .

3)

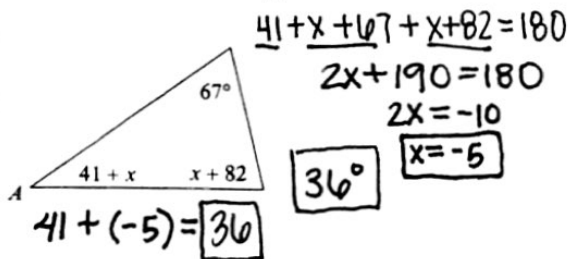


4)

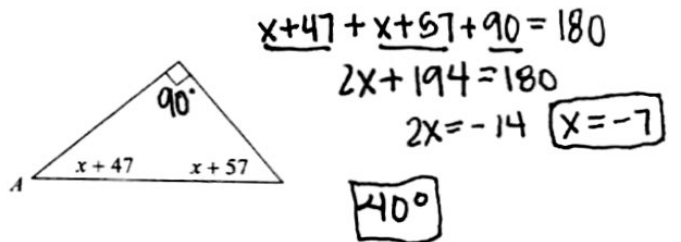


Find the measure of angle A.

5)

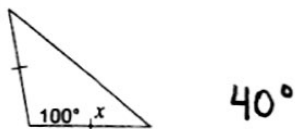


6)

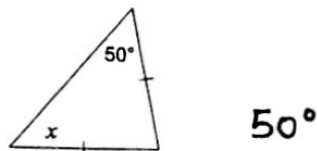


Find the value of x .

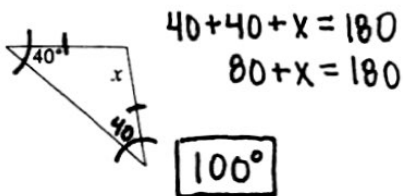
7)



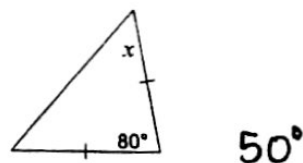
8)



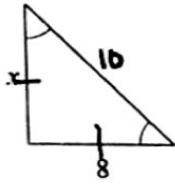
9)



10)

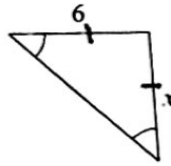


11)



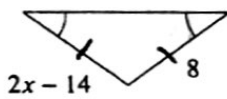
8

12)



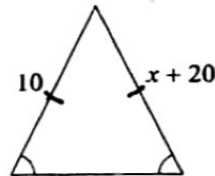
6

13)



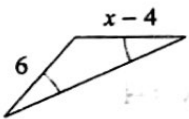
11

14)



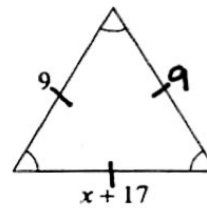
-10

15)



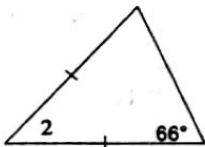
10

16)



-8

17) $m\angle 2 = x + 54$



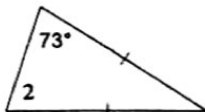
-6

18) $m\angle 2 = x + 56$



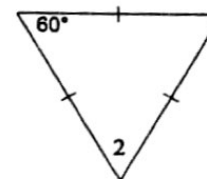
-6

19) $m\angle 2 = 6x + 7$



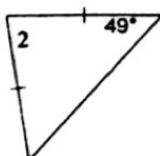
11

20) $m\angle 2 = x + 68$



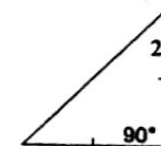
-8

21) $m\angle 2 = 6x + 10$



12

22) $m\angle 2 = -9 + 6x$



9