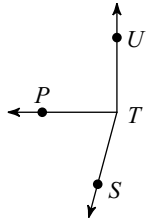


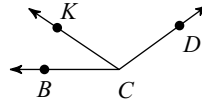
Unit 1 - Quiz Review

Find the measure of each angle.

- 1) Find  $m\angle STP$  if  $m\angle STU = 165^\circ$   
and  $m\angle PTU = 90^\circ$ .

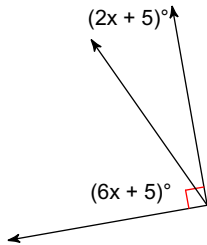


- 2) Find  $m\angle BCK$  if  $m\angle KCD = 110^\circ$   
and  $m\angle BCD = 144^\circ$ .

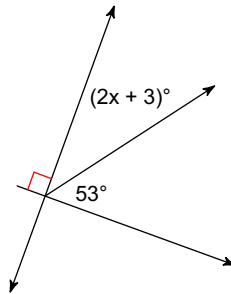


Find the value of x.

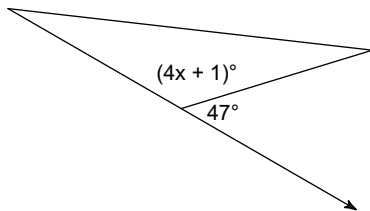
- 3)



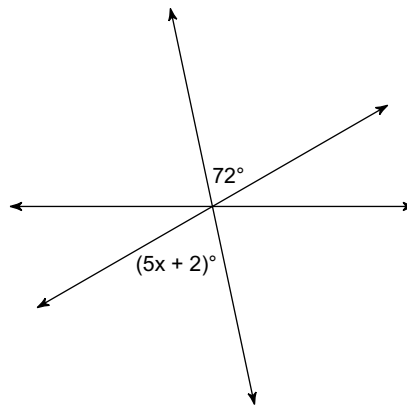
- 4)



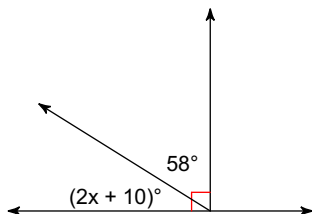
- 5)



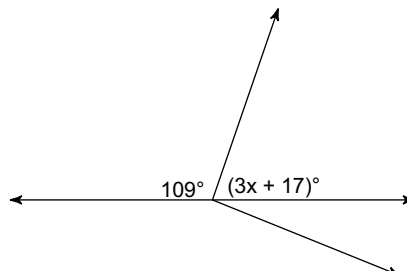
- 6)



- 7)

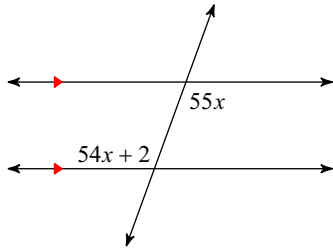


- 8)

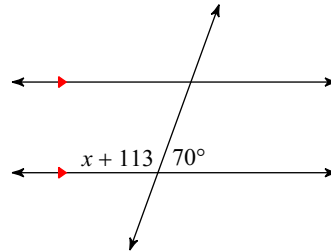


Solve for  $x$ .

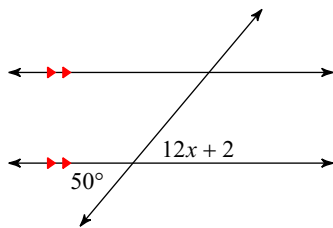
9)



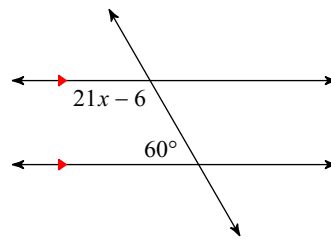
10)



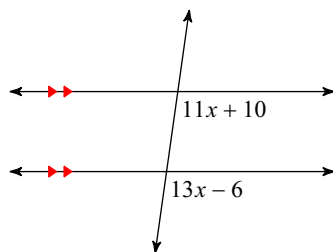
11)



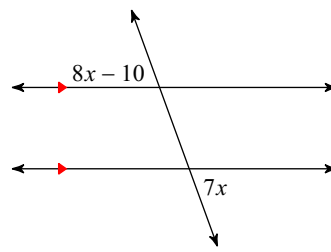
12)



13)

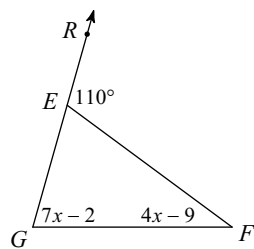


14)

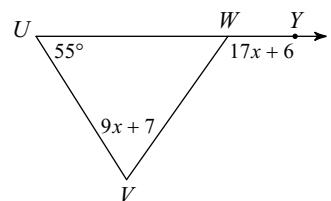


Solve for  $x$ .

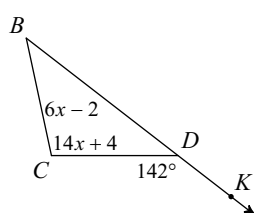
15)



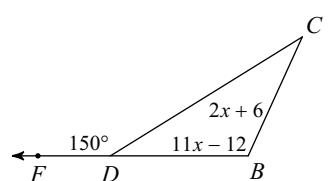
16)



17)



18)



## Answers to Unit 1 - Quiz Review (ID: 1)

1)  $75^\circ$

5) 33

9) 2

13) 8

17) 7

2)  $34^\circ$

6) 14

10)  $-3$

14) 10

18) 12

3) 10

7) 11

11) 4

15) 11

4) 17

8) 18

12) 6

16) 7